


COMPARE SIZE, WEIGHT AND CAPACITY

KS1 – 2001 Paper

1.



Ann measured the height of these 2 dolls in blocks.

17 How many blocks **taller** is the large doll?  blocks

KS1 – 2002 Papers

2.

Megan is **109cm** tall.

Sunil is **137cm** tall.

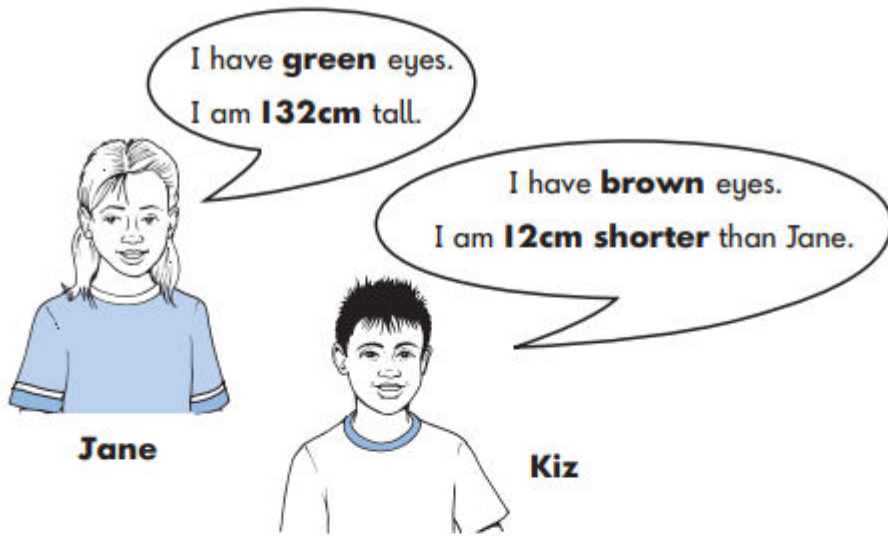
32 How much taller is Sunil than Megan?



**Megan**  
109cm

**Sunil**  
137cm

cm
----








Write **Jane** and **Kiz** in the correct boxes on the sorting diagram.

	has <b>brown</b> eyes	does <b>not</b> have <b>brown</b> eyes
is <b>shorter</b> than 120cm		
is 120cm tall		
is <b>taller</b> than 120cm		

25

Look at this table.

object		length
ruler		30cm
paintbrush		19cm
book		24cm
pencil		15cm
crayon		12cm

a Which object is **half** the length of the ruler?b The ruler is **longer than** the crayon.


How much longer?

 cm


28

Abdul goes to the zoo.

He finds out the mass of some animals.



Cheetah  
**58 kg**



Tiger  
**94 kg**



Lion  
**94 kg**

Compare the mass of the animals.

Write  $<$  or  $>$  or  $=$  in each box.

Cheetah's mass

Tiger's mass

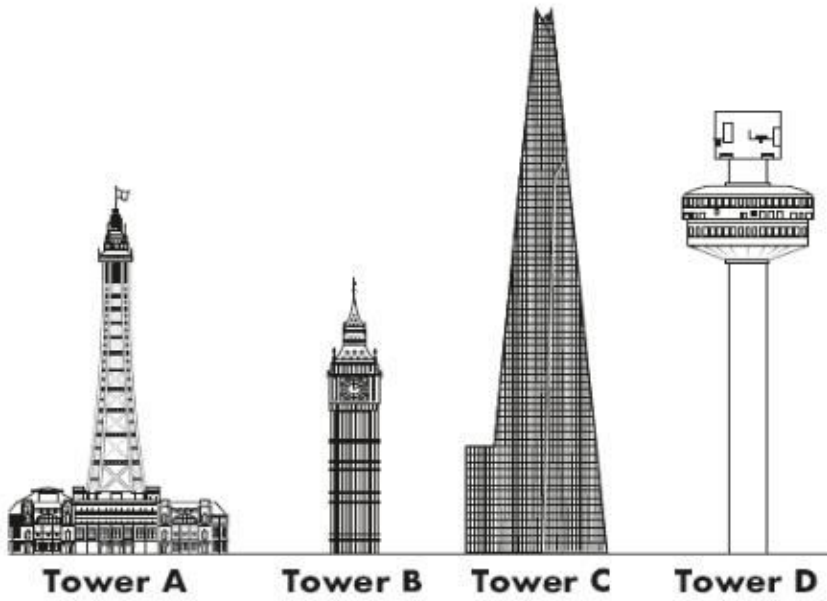
Tiger's mass

Lion's mass





6




Put the four towers in order from **tallest** to **shortest**.

One is done for you.



**tallest**



**shortest**



1 mark